

Algebra Unit 1 Function Relationships

Name: _____

Day 6 Homework Worksheet

Date: _____ Hour: _____

Matching: Fill in the letter for each TIME GRAPH that corresponds to the numbered INTERPRETATION.

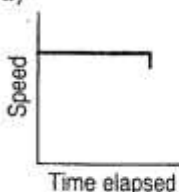
1	2	3	4	5
6	7	8	9	

Indicate which graph matches the statement.

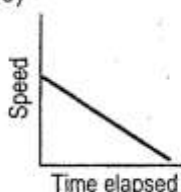
1)

A train pulls into a station and lets off its passengers.

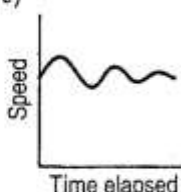
a)



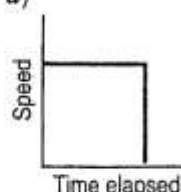
b)



c)



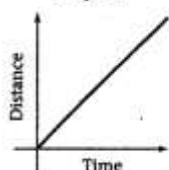
d)



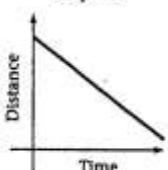
2)

We walked at a steady pace toward the museum.

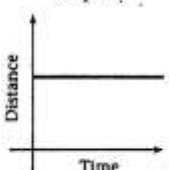
Graph A



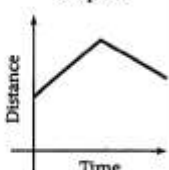
Graph B



Graph C



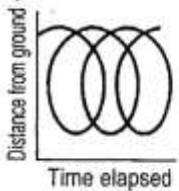
Graph D



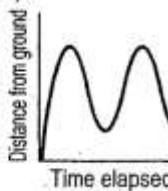
3)

A man takes a ride on a ferris wheel.

a)



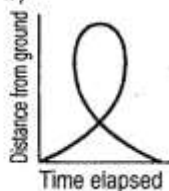
b)



c)



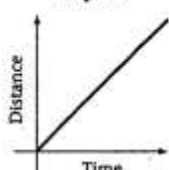
d)



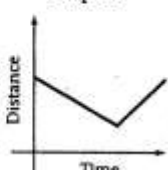
4)

My sister ran away from the museum but came back when my parents called her.


Graph A



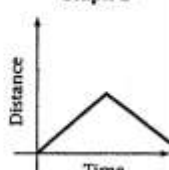
Graph B



Graph C



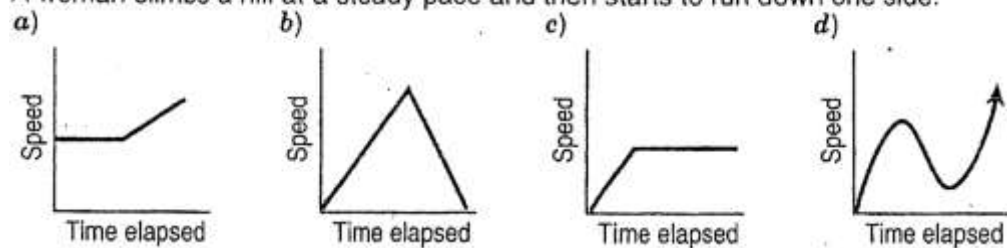
Graph D



Indicate which graph matches the statement.

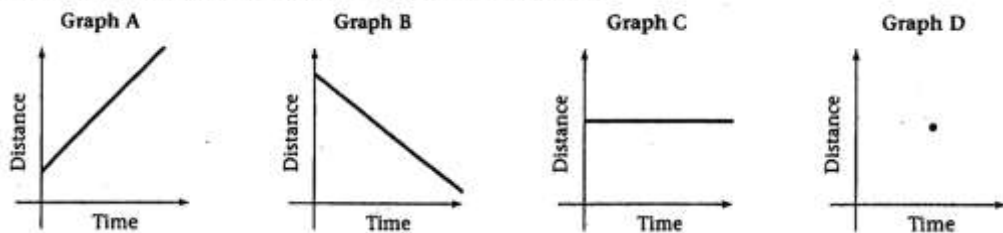
5)

A woman climbs a hill at a steady pace and then starts to run down one side.



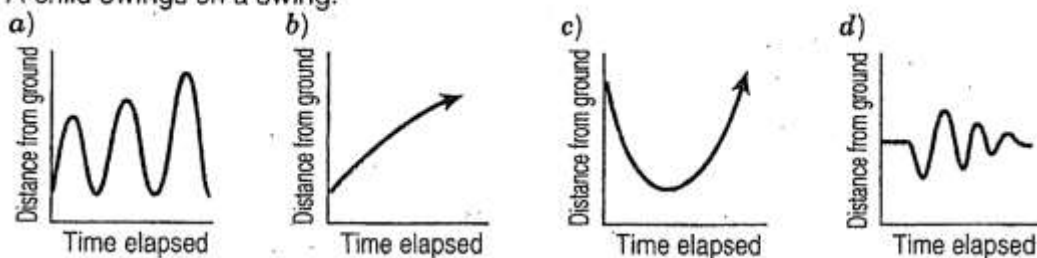
6)

My father stood for a very long time in front of a painting.



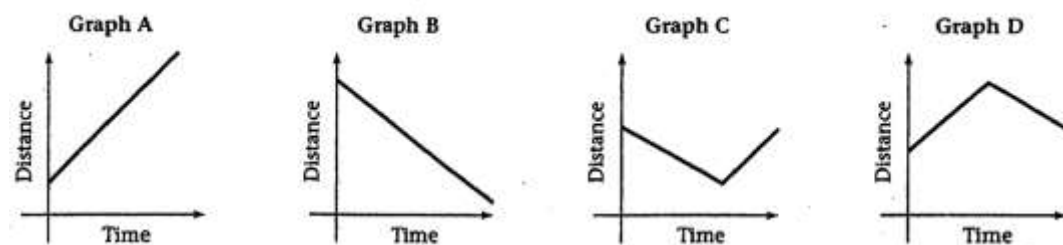
7)

A child swings on a swing.



8)

Afterward, we raced down the hill away from the museum. (Be careful here.)



9)

A child climbs up a slide and then slides down.

