

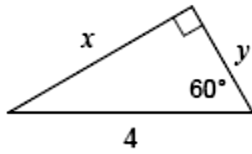
Unit 5: Right Triangle Trigonometry
Day 3 Worksheet 30°- 60°- 90° Triangles

Name: _____

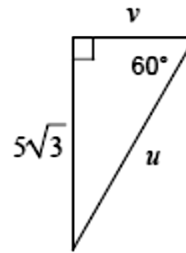
Date: _____ Hour: _____

Find the missing side lengths. Leave your answers as radicals in simplest form.

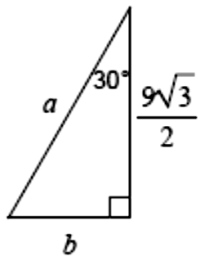
1)



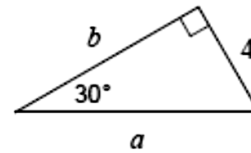
2)



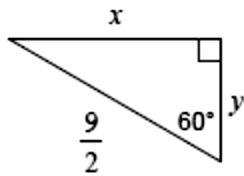
3)



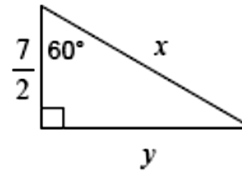
4)



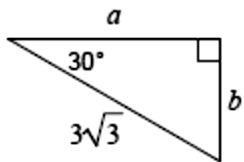
5)



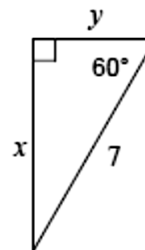
6)



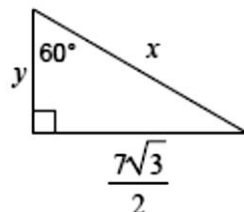
7)



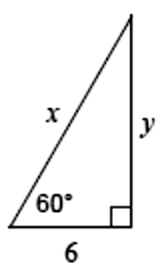
8)



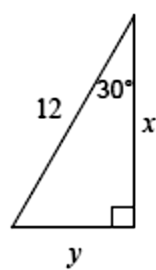
9)



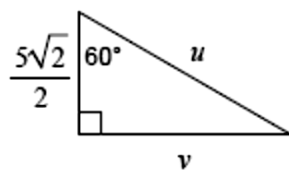
10)



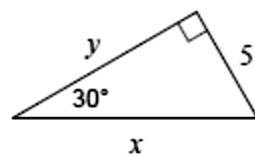
11)



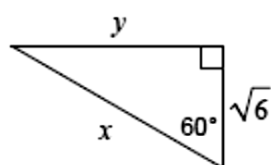
12)



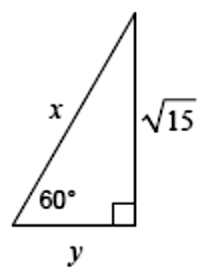
13)



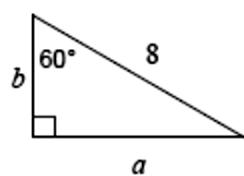
14)



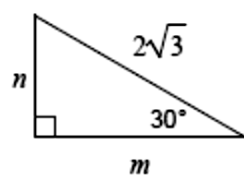
15)



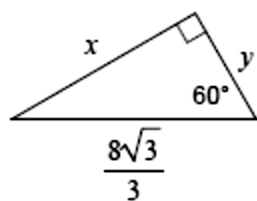
16)



17)



18)



19)

